

## Grade 7

## Part 2

Name \_\_\_\_\_

Date \_\_\_\_\_

Circle your final answer.

Fill in each blank with the correct symbol ( $<$ ,  $>$ , or  $=$ ).

1.  $\frac{10}{13}$  \_\_\_\_ 0.8

2.  $0.\overline{3}$  \_\_\_\_ 0.3

Order from smallest to largest.

3.  $\frac{1}{5}$ , 0.5,  $\frac{3}{4}$ , 1.65, 0.82

Find the prime factors.

4. 75

5. 100

6. 48

Simplify.

7.  $(-8) + 17 + (-12)$

8.  $27 + -9\frac{5}{8}$

9.  $15 - 27$

10.  $(-265) - (-464)$

11.  $-26.31 - 280.2$

12.  $\frac{11}{12} - (-\frac{19}{6})$

13.  $(-\frac{8}{7})(-\frac{14}{11})$

14.  $(-3)(-3)(-3)(4)$

15.  $(\frac{3}{10})(-15)$

16.  $(\frac{6}{11})(-\frac{9}{10})$

17.  $-26.5 \div 5$

18.  $(-\frac{7}{8}) \div (-\frac{15}{8})$

19.  $\frac{-1/6}{5/6}$

20.  $6 \times 8 - 9 + 12 \div 3$

21.  $17 - 2(-5)$

22.  $-6.2 + 0.54 \div 0.9$

23.  $\frac{2.1 + 3.3}{3.6 + 0.2 \times 12}$

Rewrite each as a ratio of whole numbers.

24. 12 hours to 1 day

25. 3 pounds for 45¢

Write each ratio in simplest form.

26.  $\frac{36}{16}$

27. 42 to 24

28.  $\frac{2/3}{8}$

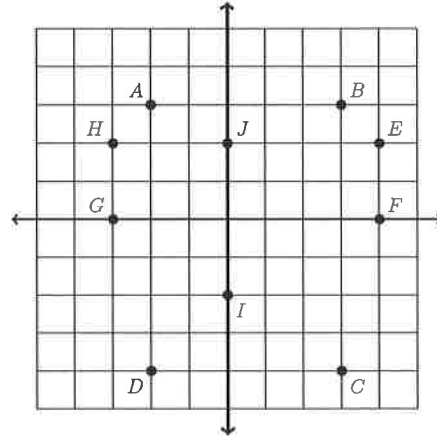
29.  $96y : 36$

Solve each proportion.

30.  $\frac{3}{15} = \frac{15}{x}$

31.  $\frac{n}{9} = \frac{5}{12}$

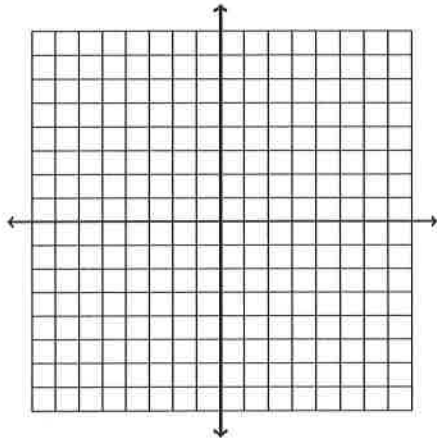
Use the diagram to answer the questions.



32. Name the quadrant containing point  $C$ .

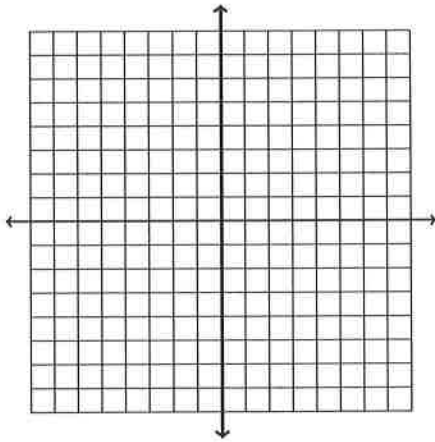
Plot the points.

33.  $(3, 2)$ ,  $(6, -1)$ ,  $(-4, -1)$ ,  $(-1, 2)$ ,  $(3, 2)$

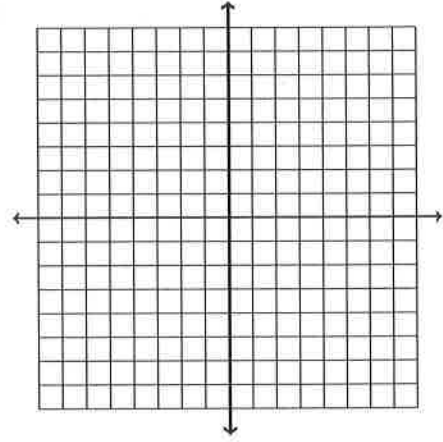


Graph.

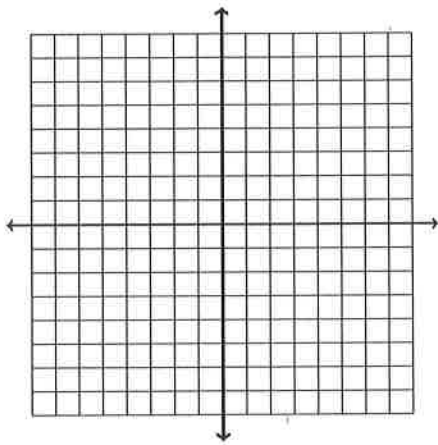
34.  $y = -2x$



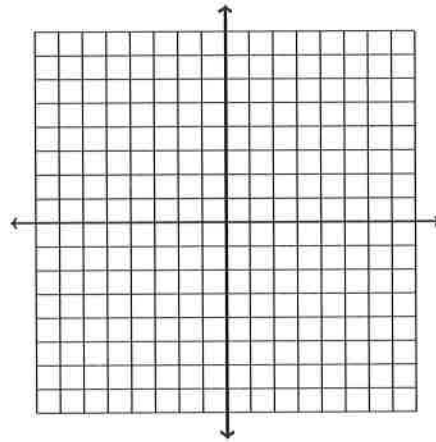
35.  $y = \frac{1}{3}x$



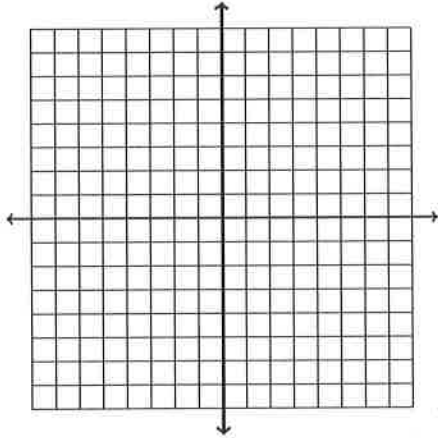
36.  $y = 5x^2$



37. Draw a vertical line through the point  $(-6, 0)$ .



38. Plot the points  $(-3, -7)$  and  $(6, -7)$ . Label the midpoint.



Write as an algebraic expression.

39.  $a$  increased by 6
40.  $w$  less than 17
41. 22 divided by the product of  $c$  and  $d$
42. Nineteen plus  $a$  squared
43. The value (in cents) of  $d$  dimes and  $n$  nickels.
44. twice a number  $n$
45. the sum of 7 times a number and 1
46. the price of a TV that originally cost  $p$  dollars, after a 20% discount

Evaluate.

47.  $s \cdot 2$  for  $s = 3$
48.  $3d$  for  $d = 5.7$
49.  $-s - 27$  for  $s = -16$
50.  $5.2 + n$  for  $n = -7.5$
51.  $8(5 - z)$  for  $z = 2$
52.  $\frac{d + 3.4}{5.1}$  for  $d = 22.1$

53.  $3 - s \div 6$  for  $s = 24$

54.  $2x + 3$  for  $x = -5$

55.  $1.9 - 6.4 \div n$  for  $n = -4$

56.  $-21 - 5x$  for  $x = \frac{8}{9}$

57.  $\frac{z}{s}$  for  $z = 5$ ,  $s = \frac{15}{17}$

58.  $\frac{4}{n} + 2s$  for  $n = 4$ ,  $s = 6$

59.  $1.4(t - d)$  for  $t = 9.4$ ,  $d = 5.5$

60.  $2nt$  for  $n = 6$ ,  $t = \frac{5}{16}$

61.  $\frac{15}{n} + 6s$  for  $n = -3$ ,  $s = -6$

62.  $3rn$  for  $r = 5$ ,  $n = -2.1$

Evaluate for the given value(s).

63.  $A = lw$  for  $l = 2.7$ ,  $w = 2$

64.  $A = \frac{1}{2}(B + b)h$  for  $B = 7$ ,  $b = 5$ ,  $h = 9$

65.  $V = \frac{4}{3}\pi r^3$  for  $\pi = 3.14$ ,  $r = 3$

66. The formula  $P = 2(l + w)$  gives the perimeter of a rectangle. Find the perimeter of a rectangle whose length  $l = 9$  inches and width  $w = 7$  inches.

67. The formula  $S = 2(lw + wd + ld)$  gives the surface area of a rectangular solid. Find the surface area of the solid with length  $l = 7$  meters, width  $w = 4$  meters, and depth  $d = 9$  meters.

Solve.

68.  $\sqrt{\square} = 3$

69.  $19 = n + 12$

70.  $s - 25 = 38$

71.  $5\frac{2}{5} - s = 1\frac{1}{10}$

72.  $4b = -48$

73.  $\frac{1}{10}b = 10$

74.  $-\frac{5}{8}y = 40$

75.  $\frac{s}{1.8} = 3$

76.  $s^2 = 1.44$

77.  $-\sqrt{d} = -4$

78.  $-\sqrt{t} = -\frac{1}{3}$

79.  $\frac{3x}{7} + 11 = 18$

80.  $5y - 0.4 = 0.4$

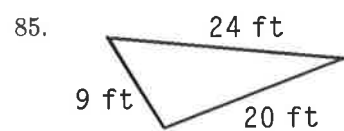
81.  $-14t + 15 = 21$

82.  $-28 - a = -32$

83.  $20x - (-9) = 25$

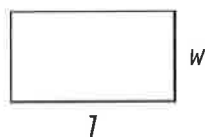
84.  $-2a - 0.3 = 1.4$

Find the perimeter.

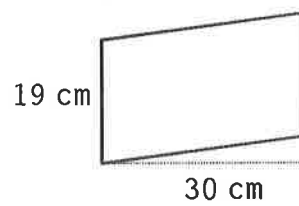


Find the area.

86.  $l = 4\text{ m}, w = 2\text{ m}$

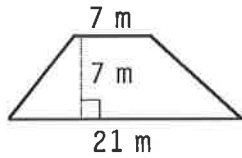


87.

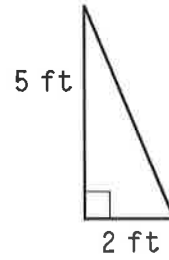




88.

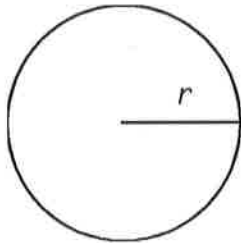


89.



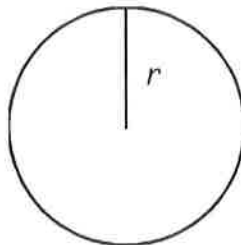
Find the circumference. (Use  $\pi = 3.14$ .)

90.  $r = 10$  m



Find the area. (Use  $\pi = 3.14$ .)

91.  $r = 8$  ft



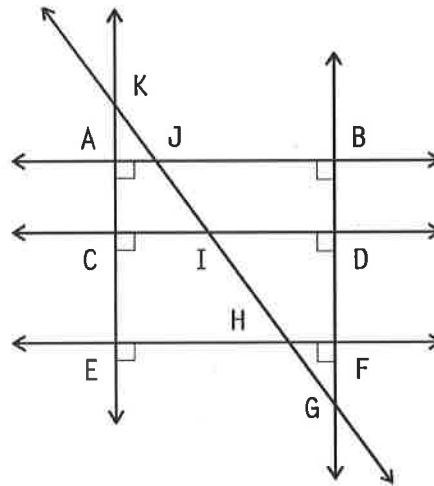
92. A rectangle has length  $l = 12$  millimeters and width  $w = 10$  millimeters. Find the area of the rectangle.

93. Find the area of a parallelogram with base  $b = 5$  inches and height  $h = 4$  inches.

94. What is the area of a trapezoid with one base  $B = 2\frac{1}{6}$  feet, a second base  $b = 1\frac{5}{6}$  feet and height  $h = 3\frac{1}{3}$  feet?

95. A triangle with base  $b = 2\frac{1}{3}$  feet and height  $h = 1\frac{2}{3}$  feet. What is the area of the triangle?

Refer to the diagram to answer the questions.



96. Name a line perpendicular to  $\overleftrightarrow{EF}$ .

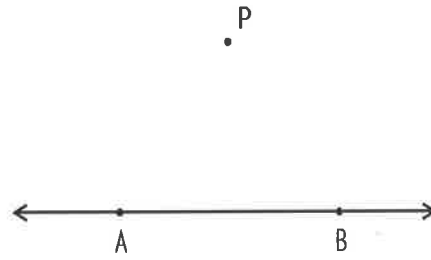
Draw each of the following.

97. a right triangle with base  $b = 2$  cm and height  $h = 5$  cm

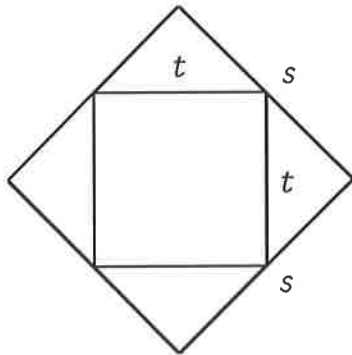
98. the ray  $\overrightarrow{EF}$

99. the right angle  $\angle RST$

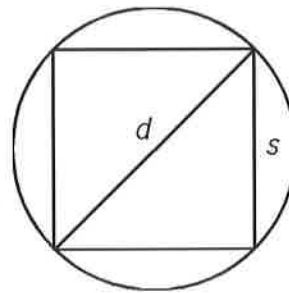
100. Construct a perpendicular to  $\overleftrightarrow{AB}$  through point  $P$ .



101. Find the area of a square inscribed in a square with perimeter  $P = 8$  inches.



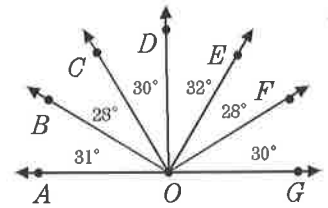
102. Find the circumference of a circle circumscribed about a square with area  $A = 2$  inches.



103. Find the perimeter of a square inscribed in a circle with circumference  $C = 10$  inches.

104. In the figure, name a pair of perpendicular rays?

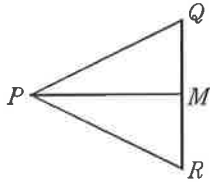
- a)  $\overrightarrow{OB}$  and  $\overrightarrow{OC}$
- b)  $\overrightarrow{OD}$  and  $\overrightarrow{OF}$
- c)  $\overrightarrow{OA}$  and  $\overrightarrow{OD}$
- d)  $\overrightarrow{OB}$  and  $\overrightarrow{OE}$
- e)  $\overrightarrow{OA}$  and  $\overrightarrow{OG}$



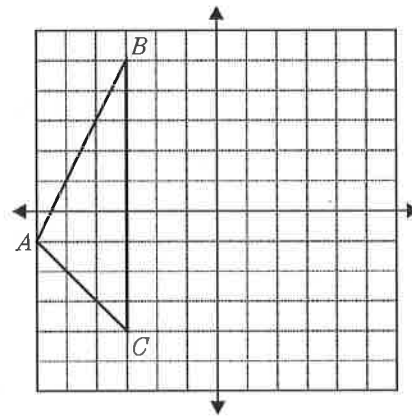
105. How many lines of symmetry does an equilateral triangle have?

106. How many planes of symmetry does a right rectangular pyramid have?

107. Name the transformation that maps  $\triangle PMR \rightarrow \triangle PMQ$ .



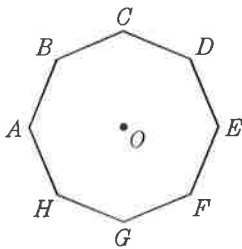
108. In the diagram,  $\triangle ABC$  has points  $A(-6, -1)$ ,  $B(-3, 5)$ , and  $C(-3, -4)$ . Sketch and label the image  $\triangle A'B'C'$  under the translation  $T(x, y) \rightarrow (x + 4, y - 1)$ . Then draw arrows from points  $A$  to  $A'$ ,  $B$  to  $B'$ , and  $C$  to  $C'$ . Name a characteristic shared by  $\overline{AA'}$ ,  $\overline{BB'}$ , and  $\overline{CC'}$ .



109. Using the diagram of the regular octagon with center  $O$ , determine where the given point ends up after the assigned rotation.

110. What is the image of the point  $(1, 1)$  under a rotation of  $30^\circ$  about the point  $(2, 2)$ ? Express your answer to the nearest hundredth.

$R_{O, -270}: C \rightarrow \underline{\hspace{2cm}}$

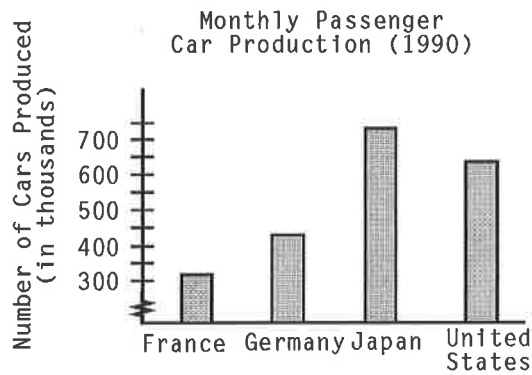


111. A mapping  $R$  maps each point  $(x, y)$  to the point  $(3x, y + 2)$ . Express this mapping using mapping notation and determine the image of the point  $(3, 1)$ .

Find the range, mean, median and mode.

112. 321, 278, 304, 278, 350, 304, 288, 300, 304

113. About how many cars per month were produced in Germany in 1990?



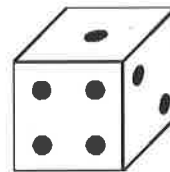
114. Who ruled England for the shortest period of time?

British Monarchs		
	<i>age when rule began</i>	<i>age at death</i>
Queen Victoria	18	81
King Edward VII	60	68
King George V	44	70
King Edward VIII	42	77
King George VI	41	57
Queen Elizabeth II	26	<i>living</i>

115. Find the number of possible outcomes if you pick a card from a deck of 52 and you toss a coin?

116. You pick a marble from a bag of 5 differently colored marbles, then replace the marble, and pick another. Find the number of possible outcomes.

117. Find  $P(1 \text{ and black})$



roll a die



4 black, 4 gray  
and 5 white  
pick a marble

118. Find  $P(\text{tail and diamond})$




flip a coin



pick a card

119. Find  $P(\text{odd number and king})$



roll a die



pick a card

120. A bag of marbles contains 4 black, 4 gray and 5 white marbles. Find the probability of picking a gray marble, then picking a black marble, without first replacing the gray marble.

121. What is the probability of choosing a black card then a red card from a deck of 52 cards, without returning the first card to the deck?

122. Find the probability of picking the 10 of spades then an 8 from a deck of 52 cards, without replacing the first card.

**Answer List**

- |                                   |                                   |  |
|-----------------------------------|-----------------------------------|--|
| 1. <                              | 2. >                              | 3. $\frac{1}{5}, 0.5, \frac{3}{4}, 0.82, 1.65$         |
| 4. $5 \times 5 \times 3$          | 5. $5 \times 5 \times 2 \times 2$ | 6. $2 \times 2 \times 2 \times 2 \times 3$             |
| 7. -3                             | 8. $17\frac{3}{8}$                | 9. -12   |
| 10. 199                           | 11. -306.51                       | 12. $\frac{49}{12}$                                    |
| 13. $\frac{16}{11}$               | 14. -108                          | 15. $-\frac{9}{2}$                                     |
| 16. $-\frac{27}{55}$              | 17. -5.3                          | 18. $\frac{7}{15}$                                     |
| 19. $-\frac{1}{5}$                | 20. 43                            | 21. 27   |
| 22. -5.6                          | 23. 0.9                           | 24. 1 : 2  |
| 25. 1 : 15                        | 26. $\frac{9}{4}$                 | 27. 7 : 4  |
| 28. $\frac{1}{12}$                | 29. $8y : 3$                      | 30. 75   |
| 31. $\frac{15}{4}$                | 32. IV                            | 33. IV   |
| 34. IV                            | 35. IV                            | 36. IV   |
| 37. IV                            | 38. IV                            | 39. $a + 6$  |
| 40. $17 - w$                      | 41. $\frac{22}{cd}$               | 42. $19 + a^2$   |
| 43. $10d + 5n$                    | 44. $2n$                          | 45. $7n + 1$   |
| 46. $p - 0.2p$ or $0.8p$          | 47. 6                             | 48. 17.1   |
| 49. -11                           | 50. -2.3                          | 51. 24   |
| 52. 5                             | 53. -1                            | 54. -7   |
| 55. 3.5                           | 56. $-25\frac{4}{9}$              | 57. $5\frac{2}{3}$                                     |
| 58. 13                            | 59. 5.46                          | 60. $\frac{15}{4}$                                     |
| 61. -41                           | 62. -31.5                         | 63. 5.4  |
| 64. 54                            | 65. 113.04                        | 66. 32 in  |
| 67. $254\text{m}^2$               | 68. 9                             | 69. 7  |
| 70. 63                            | 71. $4\frac{3}{10}$               | 72. -12  |
| 73. 100                           | 74. -64                           | 75. 5.4  |
| 76. 1.2                           | 77. 16                            | 78. $\frac{1}{9}$                                      |
| 79. $16\frac{1}{3}$               | 80. 0.16                          | 81. $-\frac{3}{7}$                                     |
| 82. 4                             | 83. $\frac{4}{5}$                 | 84. -0.85  |
| 85. 53 ft                         | 86. $8\text{m}^2$                 | 87. $570\text{cm}^2$                                   |
| 88. $98\text{m}^2$                | 89. $5\text{ft}^2$                | 90. 62.8 m, $314\text{m}^2$                            |
| 91. 50.24 ft, $200.96\text{ft}^2$ | 92. $120\text{mm}^2$              | 93. $20\text{in}^2$                                    |
| 94. $6\frac{2}{3}\text{ft}^2$     | 95. $1\frac{17}{18}\text{ft}^2$   | 96. $\overleftrightarrow{BG}, \overleftrightarrow{AE}$ |
| 97.                               | 98.                               | 99.  |
| 100.                              | 101. $2\text{in}^2$               | 102. $\approx 6.3\text{in}$                            |
| 103. $\approx 9.0\text{in}$       | 104. d                            | 105. 3   |



106. 2
109. A
112. 278–350, 303, 304, 304
115. 104
118.  $\frac{1}{8}$
121.  $\frac{13}{204}$
107. reflection in  $\overline{PM}$
110. (1.63, 0.63)
113. 400,000
116. 25
119.  $\frac{1}{26}$
122.  $\frac{1}{663}$
108.  $A'(-2, -2)$ ,  $B'(1, 4)$ ,  
 $C'(1, -5)$ ; rays are parallel
111.  $R: (x, y) \rightarrow (3x, y + 2)$ ; (9, 3)
114. Edward VII
117.  $\frac{2}{39}$
120.  $\frac{4}{39}$

## Catalog List

- |                 |                 |                 |
|-----------------|-----------------|-----------------|
| 1. PRE DE 145   | 2. PRE DE 165   | 3. PRE DF 45    |
| 4. PRE DH 25    | 5. PRE DH 65    | 6. PRE DH 45    |
| 7. PRE DI 105   | 8. PRE DI 185   | 9. PRE DJ 65    |
| 10. PRE DJ 105  | 11. PRE DJ 145  | 12. PRE DJ 185  |
| 13. PRE DK 105  | 14. PRE DK 185  | 15. PRE DK 225  |
| 16. PRE DK 245  | 17. PRE DL 105  | 18. PRE DL 145  |
| 19. PRE DL 205  | 20. PRE DM 25   | 21. PRE DM 105  |
| 22. PRE DM 185  | 23. PRE DM 225  | 24. PRE GA 25   |
| 25. PRE GA 85   | 26. PRE GB 25   | 27. PRE GB 65   |
| 28. PRE GB 105  | 29. PRE GB 145  | 30. PRE GD 25   |
| 31. PRE GD 45   | 32. PRE IA 25   | 33.             |
| 34.             | 35.             | 36.             |
| 37.             | 38.             | 39. ALG CF 25   |
| 40. ALG CF 65   | 41. ALG CF 105  | 42. ALG CF 145  |
| 43. ALG CF 185  | 44. PRE JG 25   | 45. PRE JG 45   |
| 46. PRE JG 85   | 47. PRE KA 25   | 48. PRE KA 65   |
| 49. PRE KA 145  | 50. PRE KA 185  | 51. PRE KB 25   |
| 52. PRE KB 65   | 53. PRE KB 105  | 54. PRE KB 145  |
| 55. PRE KB 185  | 56. PRE KB 205  | 57. PRE KC 105  |
| 58. PRE KD 25   | 59. PRE KD 65   | 60. PRE KD 105  |
| 61. PRE KD 145  | 62. PRE KD 185  | 63. PRE KE 25   |
| 64. PRE KE 45   | 65. PRE KE 65   | 66. PRE KF 5    |
| 67. PRE KF 25   | 68. PRE LA 105  | 69. PRE LB 25   |
| 70. PRE LB 65   | 71. PRE LB 245  | 72. PRE LC 25   |
| 73. PRE LC 105  | 74. PRE LC 145  | 75. PRE LC 165  |
| 76. PRE LD 25   | 77. PRE LD 65   | 78. PRE LD 105  |
| 79. PRE LE 25   | 80. PRE LE 65   | 81. PRE LE 105  |
| 82. PRE LE 145  | 83. PRE LE 185  | 84. PRE LE 205  |
| 85. PRE OA 6    | 86. PRE OB 5    | 87. PRE OC 5    |
| 88. PRE OD 5    | 89. PRE OE 5    | 90. PRE OF 5    |
| 91. PRE OF 2    | 92. PRE OG 25   | 93. PRE OG 65   |
| 94. PRE OG 105  | 95. PRE OG 125  | 96. PRE NB 5    |
| 97. PRE NM 54   | 98. PRE NM 74   | 99. PRE NM 94   |
| 100. PRE NO 5   | 101. PRE NP 5   | 102. PRE NP 25  |
| 103. PRE NP 45  | 104. MMA KG 5   | 105. GEO LJ 5   |
| 106. GEO LJ 25  | 107. GEO LK 5   | 108. GEO LK 65  |
| 109. GEO LK 105 | 110. GEO LK 125 | 111. GEO LL 3   |
| 112. PRE PA 5   | 113. PRE PC 5   | 114. PRE PD 105 |
| 115. PRE PE 5   | 116. PRE PE 25  | 117. PRE PG 25  |
| 118. PRE PG 65  | 119. PRE PG 85  | 120. PRE PH 5   |
| 121. PRE PH 25  | 122. PRE PH 45  |                 |